

Name _____

Grade _____ Unit _____

Constructed Response Question



New York –Adventures in Time and Pkace

1. What are the names of the 5 Iroquois groups?

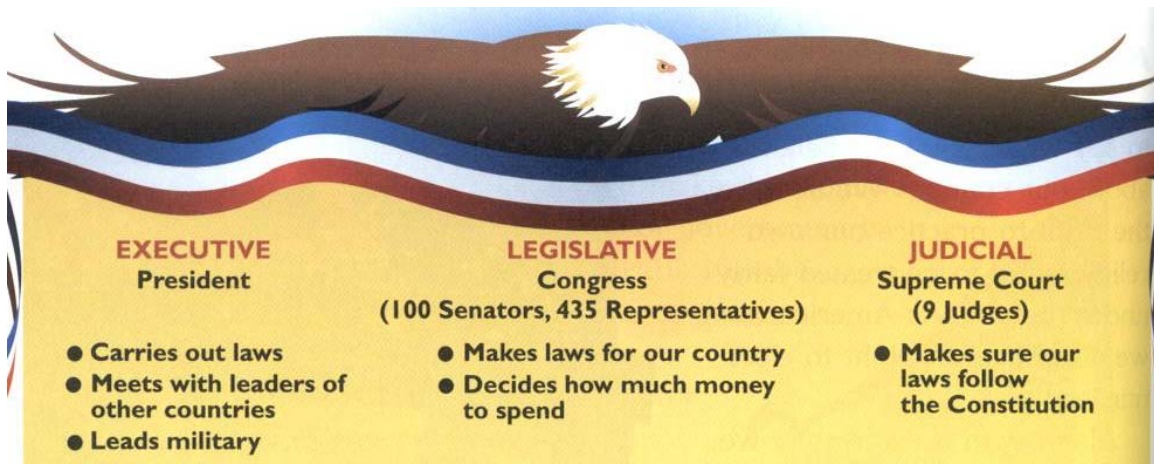
2. Which group lived farthest west? Farthest east?

3. What types of geographical features are the Native American villages located near? Why is this important to people?

Name _____

Grade _____ Unit _____

Constructed Response Question



New York –Adventures in Time and Place

1. What are the 3 branches of the national government?

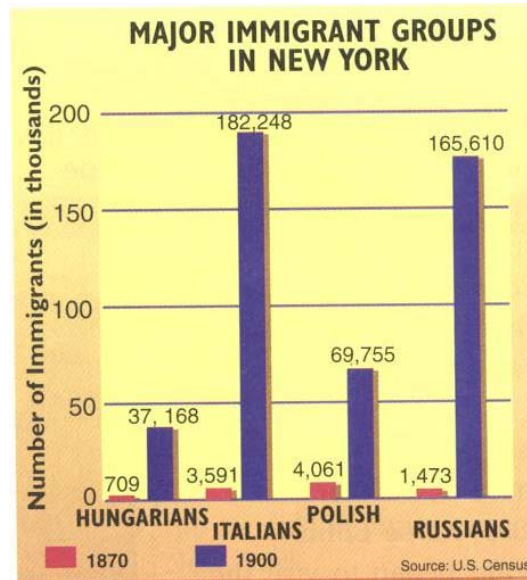
2. What are the president's duties?

3. What is the purpose of having 3 different branches of the national government?

Name _____

Grade _____ Unit _____

Constructed Response Question



New York –Adventures in Time and Place

1. What does this bar graph show?

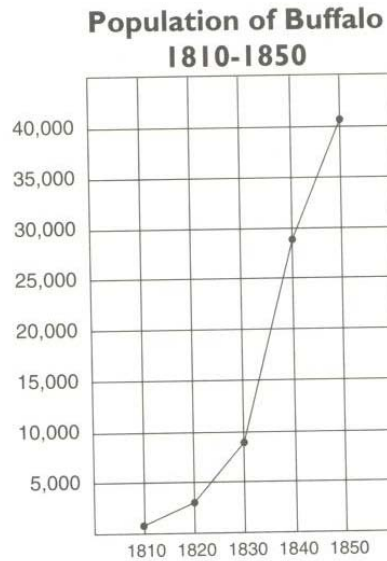
2. In 1900, which was the largest immigrant group in New York?

3. Give two reasons why so many immigrants came to America?

Name _____

Grade _____ Unit _____

Constructed Response Question



New York –Adventures in Time and Place

1. What does this line graph show?

2. According to the line graph, how did Buffalo's population change between 1810 and 1830?

3. What might have influenced the change in Buffalo's population during these years?
