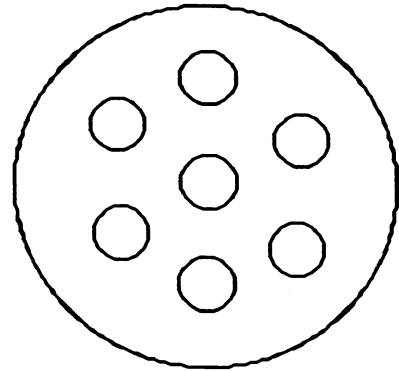


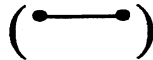
★★ 2. How many circles are there? (Total)

\_\_\_\_\_

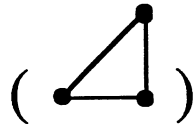


★★★ 3.


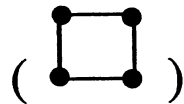
Connect 2 dots for a line.



Connect 3 dots for a triangle.



Connect 4 dots for a square.



★★★ 4. Write in the next number.

1    2    3    4    \_\_\_\_\_

3    4    5    6    \_\_\_\_\_

5    6    7    8    \_\_\_\_\_

★★★★ 5. Fill in the missing number in each row.

6 7 8 9 \_\_\_

6 \_\_\_ 8 9 10

6 7 \_\_\_ 9 10

6 7 8 \_\_\_ 10

★★★★ 6. If  $A = 1$

$B = 2$

$C = 3$

$D = 4$

$E = 5$

$F = 6$

then  $A+B+C =$  \_\_\_\_\_

(Parents: Reading the problem to your child is ALWAYS okay. If you help them solve the problems, please initial the problem and they will receive partial credit.)